
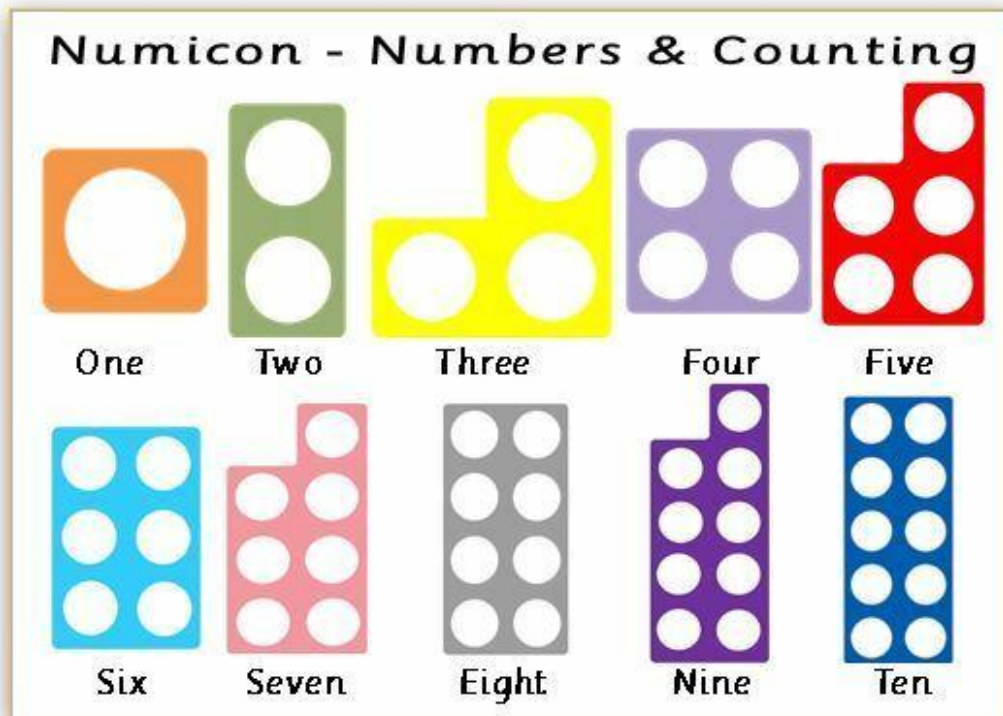


# YEAR 3 PLANNING FOR TUESDAY 24<sup>TH</sup> MARCH 2020

My dear Year 3s,

Our Literacy activity today has the goal to make you smile a bit – I hope it works! In Maths, we are reviewing something we have learned already at school. If you need to imagine the Numicon shapes to help you with halving, then you can even make your own. It will especially help for halves of odd multiples of 10 like 30, 50, 70 and 90.



Have a nice day,

Miss Julie

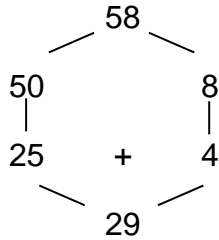
## Mathematics

P.84

Aim: To halve 2-digit numbers

Reminder of the method

Half 58



Copy the number.

Partition the number by separating the 10s and units.

Halve the 10s and units separately.

Add them together.

Remember all the ways to ask for halves:

Half of      Share in half      Share equally between 2 people       $\div 2$

$\frac{1}{2}$

Split in half

Divide by 2

Every 'half' question must be answered by using the above technique (splitting the tens and units to halve them separately)

## Literacy

Aim: to read and write puns

A pun is a play on words that produces a funny effect by using a word that has two or more meanings, or by exploiting similar sounding words that have different meanings.

On your worksheet, match the start and end of each pun. Can you see which words have a double meaning which makes the puns funny?

To help you do the bottom of the sheet, there's a ton of jokes and puns on this website: <https://www.ducksters.com/jokes/> Or maybe you can invent your own?

## Science

Last time, you watched a video about germs. This one will explain how hand sanitizer works.

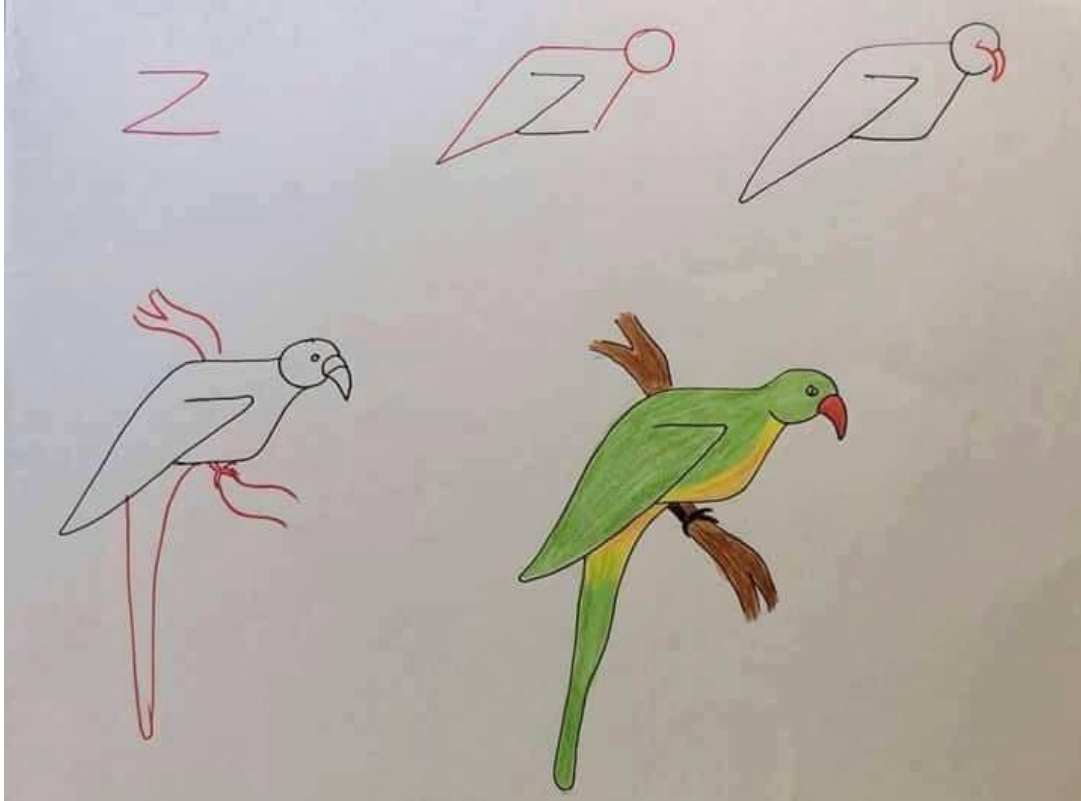
<https://mysteryscience.com/mini-lessons/germs-sanitizer?loc=mini-lesson-button>

## Extra Resources

Need more to do? There's a wide range of cool educational videos here:  
<https://thekidshouldseethis.com>

## Drawing Tutorial

Follow the steps below to draw your own parrot:



## Doubling and halving

Answer these doubling and halving problems.

- 1 What is half of 24p?
- 2  $46 \div 2 = \square$
- 3 What is half of 82p?
- 4 Halve 68.
- 5 Split 74 cm in half.
- 6 Share 38p between two.
- 7 Halve 56.
- 8 Half of 72 is  $\square$ .
- 9  $94 \div 2 = \square$
- 10 Half of 36 is  $\square$ .
- 11 Divide £92 by 2.
- 12  $78 \div 2 = \square$
- 13 For a school sports day, 42 oranges are cut into half. How many halves are there?
- 14 The children in each class were put into two equal teams. Class A has 28 children. How many in each team?
- 15 An 86 cm piece of ribbon is cut equally in two and each is tied to the winner's trophy. How long is each piece of ribbon?
- 16 Mr Shar gives £96 to his two sons, Akmal and Raj, to share equally. How much did each son get?
- 17 Akmal and Raj decide to give £29 each to a charity. How much did they give altogether?
- 18 The boys now have £38 altogether. How much is that each?



   I am confident with doubling and halving numbers up to 100.

Name: \_\_\_\_\_

Date: \_\_\_\_\_

## Puns

1. Match the two parts of the jokes. Discuss the meanings of each pun.

Did you hear about the man who was cut in half?

(running late).

A small boy swallowed some coins and was taken to a hospital. When his grandmother telephoned to ask how he was, a nurse said,

A (woolly jumper).

The jogger overslept and found himself

(No change) yet.

What do you call a sheep that can do the long jump?

He's (all right) now.

2. Make a list of other jokes that use puns. You can look in joke books for ideas.

---

---

---

